

Social Studies

Revision



Tekart Learning

P.2

Name:

School:

Year:

Table of Contents

PAPER 1	3
PAPER 2	10
PAPER 3	17
PAPER 4	25
PAPER 5	32
PAPER 6	40
PAPER 7	47
PAPER 8	54
PAPER 9	62
PAPER 10	70
PAPER 13	87
PAPER 14	94
PAPER 15	99
PAPER 16	104
PAPER 17	112

For more Booklets of this kind, Visit www.tekartlearning.com or call [+256754895241](tel:+256754895241)

PAPER 1

SECTION A

1. What is a school?

2. Write one member of an extended family.

3. Why do we need class rules?

4. Draw and name two play objects made from banana fibres.

5. Name two sources of food.

(i) _____

(ii) _____

6. Name one important place in a community where people go for treatment.

7. How are cultural practices important to people?

8. Draw and name two things a school can buy from the neighbourhood.

9. Name two items found in a bedroom.

(i) _____ (ii) _____

10. Name two items used to clean our classroom.

(i) _____ (ii) _____

11. How are markets important to people?

12. Name two school symbols found on a school uniform.

(i) _____ (ii) _____

13. Give two roles of children at home.

(i) _____

(ii) _____

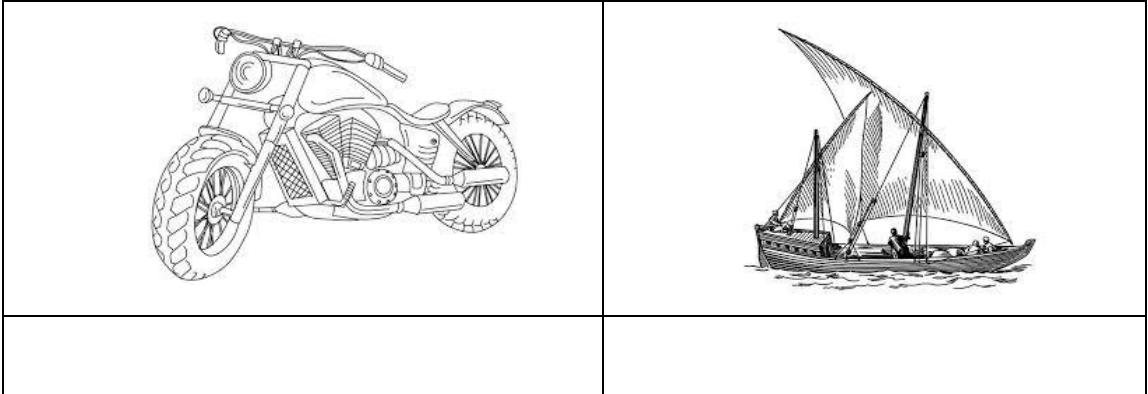
14. Draw and name two building materials got from shops.

15. Where do people keep their money safely?

16. Name any two things used to locate our school.

(i) _____ (ii) _____

17. Name these means of transport



18. Which type of weather causes the following,

(a) floods _____

(b) sweat _____

19. Name two things teachers use to teach children.

(i) _____

(ii) _____

20. Why do we keep dogs at home?

21. Name one thing we can get from a swamp.

22. Name the tool used at school to change lessons.

23. How is a school important in a community?

24. Name two disciples of Jesus

(i) _____

(ii) _____

25. Draw and name two things God created to give us light.

26. Who was the heavenly father of Jesus?

SECTION B

27. Match correctly.

Teacher	factory
Doctor	garden
Farmer	hospital
Carpenter	school

28. Name two activities done by people in our community.

(i) _____

(ii) _____

29. Give one basic need of a family?

30. Draw and name two things we can buy from a carpenter.

31. Where do we find the headmaster in a school?

32. Give one use of balls.

33. Give one use of trees at home.

34.



(a) Name the material used to make this item.

(b) Give two uses of this item.

(i) _____


(ii) _____

35. Give two unsafe ways of using roads.

(i) _____

(ii) _____

36. What do these traffic road signs show?



37. Name any two groups of people who keep security in our community.

(i) _____

(ii) _____

38. Give the uses of these tools.

39. (a) Which element of weather causes soil erosion?

40. Give one use of a basket.

41. Name the Holy book for Christians.

42. How did Jesus serve his people?

43. Who died for our sins?

44. Name the symbol for God's love.


PAPER 2

SECTION A: (40 MARKS)

1. Which school symbol helps people to locate our school?

2. Write one thing a school gets from its neighbourhood.

3. Name these means of transport.



4. How important are lakes and rivers to people?

5. Give one unsafe way of using the road.

6. What is a nuclear family?

7. Why do we carry umbrellas on a rainy day?

8. How useful are builders in a community?

9. Which type of weather helps in winnowing seeds?

10. Draw and name one play object.

11. Give one importance of a clock in a classroom.

12. In which type of family do we find uncles?

13. Name any one material we can get from a swamp.

14. Why do we need flowers in our homes?

15. What is culture?

16. State one duty of children at home.

17. Mention one activity carried out in a community.

18. Give one cause of problems between a school and its

neighbourhood.

19. Match correctly.

librarian

kitchen

nurse

office.

headteacher

library

cooks

sick bay

20. Why do we need doctors in a community?

21. Give one way people can care for plants in a compound.

22. In which important place do we find aeroplanes?

23. Where do we get nails for building houses?

24. What does this traffic road sign show to drivers?



25. Name one basic need of a family.

26. According to the story of creation, what did God do on the

seventh day?

27. Draw these symbols of Christianity.

cross	rosary	Bible

28. Who was the mother of Jesus?

29. How did Jesus show love to Lazarus?

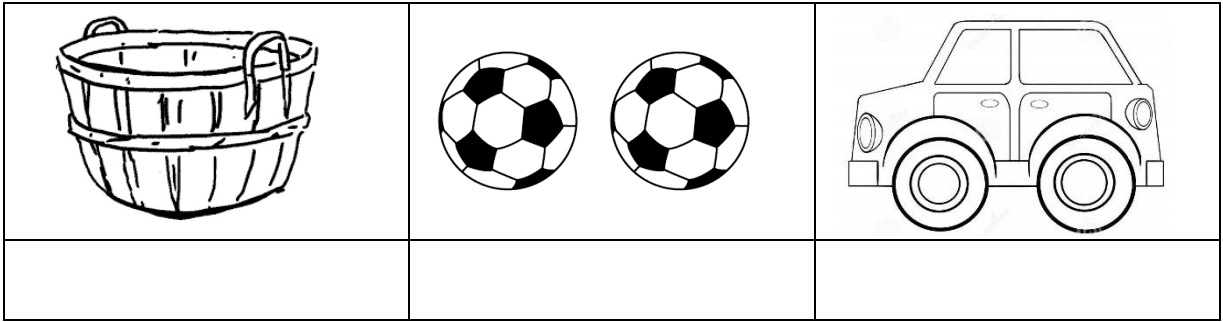
30. On which day did Jesus die on the cross?

31. On which day did the disciples receive the Holy Spirit?

32. Draw and name any two non – living things God created in our environment.

SECTION B (60 MARKS)

33. Name these things we make.



34. (a) Write our school motto.

(b) What is the importance of school symbols?

35. Draw and name any two things we use to manage a sunny weather.

36. (a) What name is given to a group of people related by blood or marriage?

(b) Give one role of a father at home.

37.



(a) What type of transport is this?

(b) Mention any one dangerous thing on the road.

38. (a) In which season is planting of crops mostly done by farmers?

(b) Give any one way in which farmers care for their crops.

39. (a) Write down any two common ceremonies that take place at home

(i) _____

(ii) _____

(b) Name any two musical instruments that are played at the ceremonies.

(i) _____

(ii) _____

40. (a) What are domestic animals?

(b) Give one use of cows to us.

41. Name two things made by a carpenter.

(i) _____

(ii) _____

42. Give the uses of these things we make?

(a) mats _____

(b) ropes _____

43. (a) Name any two people who keep peace and security at school.

(i) _____

(ii) _____

(b) What animal is kept at home for security?

44. Write one religious activity we do before eating food?

45. Mention any one gift of people at home.

(i) _____

(ii) _____

46. How can you show love and concerns for each other?

47. Name one item used during baptism.

PAPER 3

SECTION A: (40 MARKS)

1. Along which road is your school located?

2. Why do you come to school?

3. Write **one** member of an extended family.


4. Give **one** importance of a school sign post.

5. What is the role of a mother at home?

6. How is a hoe useful to a farmer?

7. In which season do most farmers harvest their crops?

8. **Name these things we make.**



9. Give **one** cause of problems between the school and the neighbourhood.

10. Name **one** animal that lives in water.

11. Why do people keep dogs at home?

12. (a) **Name this school symbol.**




(b) Where do we find this symbol in a school?

13. Give **one** use of a house to us.

14. Write **one** activity done by children at school.

15. Why is a carpenter important in a community?

16. **Where do we find this animal?**



17. Why do we need policemen in our community?

18. Give **one** material that we use to make mats.

19. Mention any **one** cultural practice in the community.

20. In which room of the house do we bathe from?

21. Which domestic animal is kept for transport?

22. Name **one** thing we use to locate our school.

23. **Circle one thing that we find in a kitchen.**

television , saucepan , basin


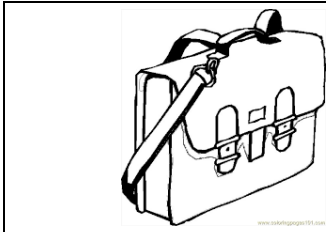
24. Mention **one** way of caring for plants.

25. Name **two** things teachers use to teach children.

(i) _____

(ii) _____

26. **Name these things we get from animal skins.**



27. How is a school important to its neighbourhood?

28. **Underline any one means of railway transport.**

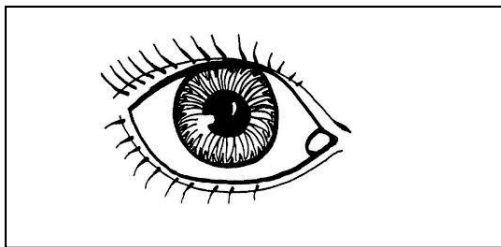
boat , bicycle , train , aeroplane

29. Write **one** role of children at home.

30. Which building material is got from soil?


Religious education

31. How is this body part useful to us?



32. Why do we pray to God?

33. Name this Holy book for Christians.



34. How can you show respect to your parents?

35. How did Jesus show love to people?

SECTION B: (60 Marks)

36. (a) What name is given to a group of people related by blood or marriage?

(b) Write **one** basic need of a family.

(c) In which type of family do we find a grandmother?

37. (a) Write **two** activities done by people in our community.

(i) _____

(ii) _____

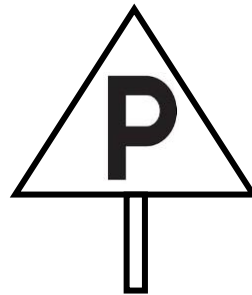
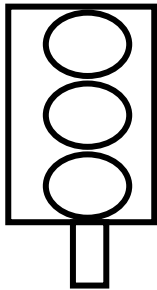
38. **Draw these things we make for playing.**

balls	Dolls

39. Where can you find these people in a school?

- (i) Nurse _____
- (ii) Librarian _____
- (iii) Headmaster _____

40. **Name these road signs.**



41. How do cleaners keep our school clean?

- (i) _____
- (ii) _____

42. (a) Mention any **one** recreation centre in our community.

(b) Give any **one** reason why we visit recreation centres?

43. **Circle any two religious leaders in our community.**

pastors , secretaries , reverends, teachers

44.



(a) Name this activity.

(b) Why do people carry out this activity?

45. (a) Give **two** examples of cultural practices.

(i) _____

(ii) _____

(b) Give the importance of cultural practices.

46. **Match these people to their work.**

Doctors

keep law and order.

Teachers

treats sick people.

Police woman

teaches children.

Religious education

47. (a) Why do we pray to God?

(b) Draw and name two things God created.

48. How can you care for a baby at home?


49. (a) Who baptized Jesus Christ?

(b) Name **one** thing used during baptism

PAPER 4

SECTION A

1. Name these things found in the classroom.



2. A _____ is a group of people related by blood or marriage. (school , family)

3. Give any two activities done at school.

(i) _____

(ii) _____

4. How is this item useful at school?



5. Why do we need cleaners in a school?

6. Draw these things found in a home.


cup	television	basket

7. Name any two rooms found in a good house.

(i) _____ (ii) _____

8. How is a father important in a home?

9. a) Name this bird kept at home.



b) Mention one thing we get from the above bird.

10. What is the name of your school?

11. Name any two important people found at school.


(i) _____

(ii) _____

12. Draw these important places found in the community.

church	mosque

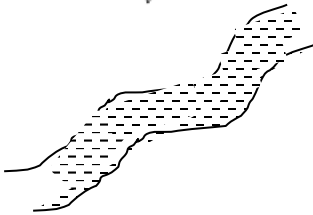
13. Match God's creation to their uses.



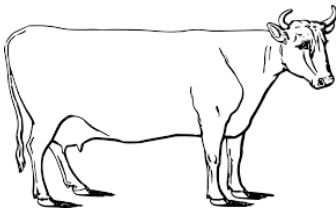
for water.



for milk.



for food.



for light.

14. On which day do Christians go for general prayers?

15. Which Christian name means 'Rock'?

16. Name any two plants found at home.

(i) _____

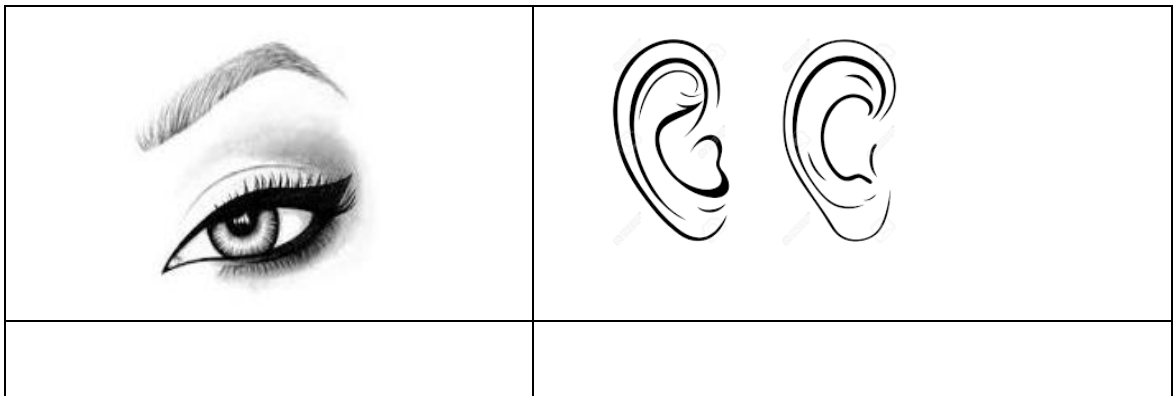
(ii) _____

17. Circle two things found in a bathroom.

bed , soap , knife , water , blanket

18. Give one role of children at home.

19. Name these gifts.



20. Where do children go to learn?

21. Why do we need a dog at home?

22. Draw these people found at home.


father	brother

23. Name any one colour of your school flag.

24. Mention one thing children use for writing.

25. Name one thing found on the school sign post.

27. Name this building.



28. a) Give one use of water at home.

b) Mention one danger of water.

26. Match people to their place of work.



office



kitchen



sick bay



library

29. Name any two things made by a carpenter.

(i) _____

(ii) _____

30. Draw these things God created

stars	moon

PAPER 5

SECTION A: (40 MARKS)


48. Mention any one school symbol.

49. Draw and name any one thing found in a classroom.

50. Give any one way of preventing problems between the school and neighbourhood.

51. Give any one role of a barber in our community.

52. Which material do we use to make this item?



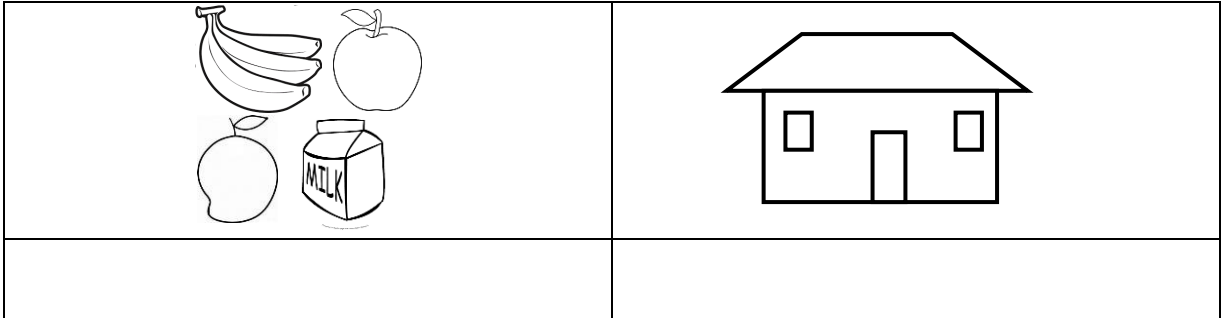
53. What is the work of religious leaders in our community?

54. Give one use of a horse to people.

55. How can Christians thank God for having made them?

56. Give any one importance of holidays to school children.

57. Name these basic needs.



58. What name is given to the mistreatment of children by an adult?

59. How do deaf people communicate to others?

60. Give any one unsafe way of using the road.

61. Name any one importance of a hospital in the community.

62. (a) Give any two causes of insecurity in our school.

(i) _____

(ii) _____

(b) Name any two people who keep peace and security in our school.

(i) _____

(ii) _____

63. Draw and name any one road sign.

64. Write down any one cultural festival in our community.

65. Give any one example of bad acts done to children at home.

66. How do people manage rainy weather?

67. What name is given to a family where we find the mother, father, children and uncles?

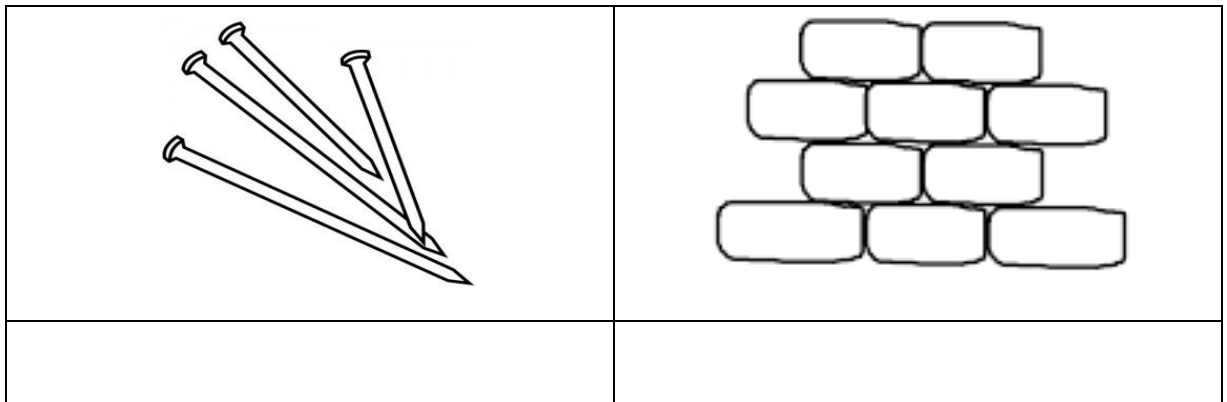
68. Write down one danger of accidents at home.

69. Why do we go to school?

70. Which type of weather causes people to sweat?

71. Give any one use of a bicycle to people in the village.

72. Name these building materials.



73. Give one work of the Holy Spirit in our lives.

74. Who was the mother of Jesus?

75. Name any one example of a flag.

76. How did Jesus show concern to people?

77. Name any one needy person.

78. Give any one example of gifts God gave to his people.

79. How do people care for God's creation?

80. Write your Religious name.

81. What did God do on the Seventh day?

82. On which day do we remember the birth of Jesus Christ?

SECTION B (60 MARKS)

83. (a) Name any two groups of people who mistreat children.

(i) _____

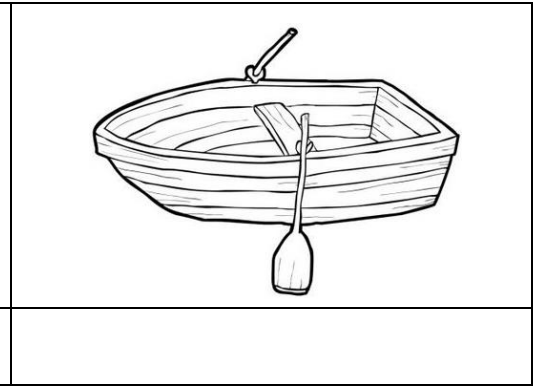
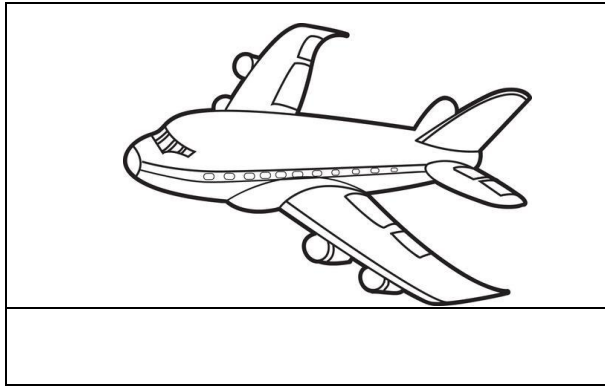
(ii) _____

(b) Give any one bad act done to children.

(c) Why is it bad to mistreat children?

84. (a) Give one example of a living mean of road transport.

(b) Name these means of transport.



(c) Write any one dangerous thing found on the road.

85. (a) Draw and name any two things we make for playing with.



(b) Give the source of banana fibres.

86. (a) Give any one importance of recreation.

(b) Name any two places where we go for recreation.

(i) _____

(ii) _____

87. (a) How do we keep our environment clean?

(b) Name one item used to clean our environment.

88. Match correctly.

Carpenters

buy and sell things.

Barbers

cut hair.

Nurses

make furniture.

Traders

take care of sick people.

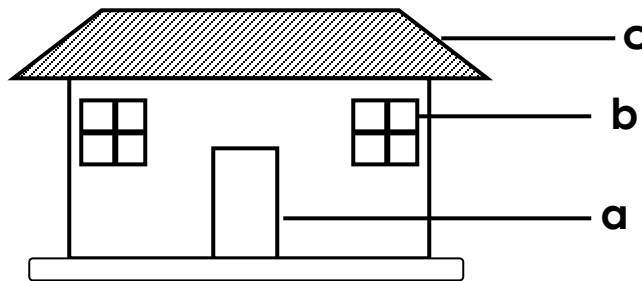
Carpenters

Barbers

Nurses

Traders

89.



(a) Name the parts of a house.

i) a _____

ii) b _____

(b) Which building material is used to make part (c)?

(c) Give one use of a house to people.

90. (a) What is worshipping God?

(b) Give any two ways of worshipping God.

(i) _____

(ii) _____

(c) Why did God give his son to die on the cross?

91. (a) Who was the twin brother of Jacob?

(b) Why do you think that God was not happy with Jacob?

PAPER 6

SECTION A:

1. What do we call a place where pupils go to learn?

2. Why do we need cooks at school?

3. What is a home?

4. **Draw and name any two play objects.**

5. Why is the animal below useful in our home?



6. How do we care for our plants at school?

i. _____

ii. _____

7. Write the motto of your school.

8. Who heads a school?

9. How can we keep peace and security at home?

10. (a) Name this school need below.



(b) Which material was used to make the school need above?

11. Name **two** important people found in a school.

i. _____

ii. _____

12. **Match correctly**

Kitchen

mattress

Bedroom

saucepans

Bathroom

chair

Sitting room

basin

13. Which activities are done to keep our school clean?

i. _____

ii. _____

14. Write the roles of these people in a home.

(a) Father

(b) Children

15. Where do people go for treatment when they are sick?

16. Give **two** uses of water.

i. _____

ii. _____

17. Along which road is your school?

18. Name any **three** things found in a classroom.

i. _____

ii. _____

iii. _____

19. a) Name this item found in a home.



(b) Which material was used to make the item named?

(c) What is the use of this item named above?

20. Write any **two** buildings found in a school.

i. _____

ii. _____

21. Which material is used for making mats?

22. Who is our heavenly father?

23. Write any **two** Christian names.




i. _____

ii. _____

24. Why do we pray to God?

SECTION B (60 MARKS):

25. **Name these things we use to manage sunny weather**

26. Give any **two** sources of water

- i. _____
- ii. _____

27. Give **two** examples of school symbols.

- i. _____
- ii. _____

28. **Name the means of transport below.**



(b) Which type of transport is used by many people?

29. Give **two** uses of sun shine.

- i) _____
- ii) _____

30. (a) What is a nuclear family?

(b) Write **two** members of a nuclear family.

- I) _____
- II) _____

31. Match these traffic road signs.




Traffic lights



Humps a head



Parking



Zebra crossing

32. (a) Name any **two** things a school can buy from the community.

i. _____

ii. _____

(b) How is a school important to a community?

33. Which bird is found on your school badge?

R.E

34. How can we show respect to all members in a family?

35. How did Jesus show love to people?

36. Name **two** gifts God gave you on your body?

i. _____

ii. _____

37. **Draw these Christian symbols**


Rosary	Cross

PAPER 7

SECTION A

1. Which element of weather is used to dry clothes?

2. Name this means of transport.



3. Name any two parts of a house.

(i) _____

(ii) _____

4. Write down one Christian name for girls.

5. State one role of these people at home.

(a) Children _____

(b) Father _____

(c) Mother _____

6. Draw and name three building materials a school can get from its neighbourhood.

7. Give any two ways we can care for plants in our school compound.


(i) _____

(ii) _____


8. Who heads a school?

9. A _____ is a group of people related by marriage or blood.

10. Why do we need these people in a community?



11. Write one use of this item below.



11. How do we keep our classrooms clean?

12. Name two animals kept at home for milk.

(i) _____

(ii) _____

13. Name two school symbols found on a uniform.

(i) _____

(ii) _____

14. Match the following correctly.

Bursar types school work.

Librarian lends books.

Secretary collects school money.

Bursar _____

Librarian _____

Secretary _____

Bursar _____

15. Write any two activities done by children at school.

(i) _____

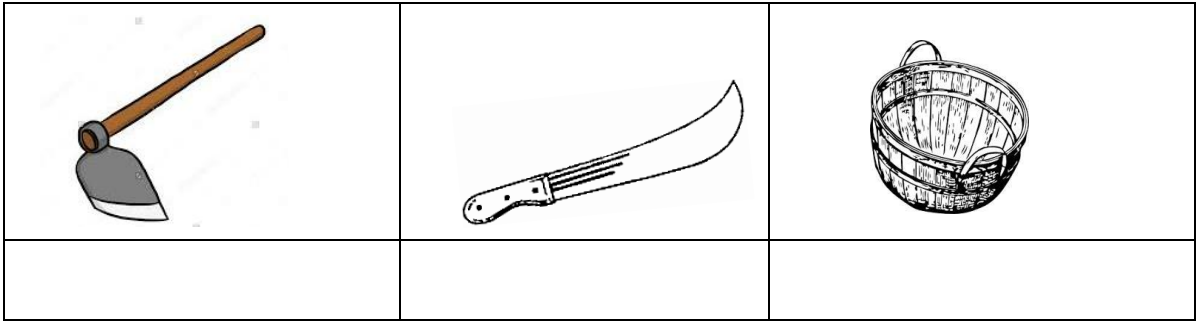
(ii) _____

16. Name two body parts we use to worship God.

(i) _____

(ii) _____

17. Name these tools used by farmers.



18. Name two animals used for transport.

(i) _____

(ii) _____

19. Mention two means of transport used on a road.

(i) _____

(ii) _____

20. Give the type of weather which makes people sweat.

21. Name one tool used for fishing.

SECTION B

22.



(a) Name this item found in a home.

(b) Which material is used to make this item?

(c) Write one use of this item.

23. Name one thing used to keep peace and security in a home.

24. Name any two things we make from animal skins.

(i) _____

(ii) _____

25. Write two members of an extended family.

(i) _____

(ii) _____

26. Give two examples of cultural practices in our community.

(i) _____

(ii) _____

27. Draw and name two things we make for playing.

28.



(a) Name this house.

(b) Give two materials used to build this house.

(i) _____

(ii) _____

29. Match correctly

Ladle

bathroom

Mat

kitchen

Clothes

sitting room

Sponge

bedroom

(i) Ladle _____

(ii) Mat _____

(iii) Clothes _____

(iv) Sponge _____

30. Name two places in a community where we can get food.

(i) _____ (ii) _____

31. Why do we fence our homes?

32. Draw and name two symbols of God's family.

33. How can we care for sick people?

34. Who was the earthly father of Jesus?

35. How do parents show love to their children?

36. Write one non-living thing God created.

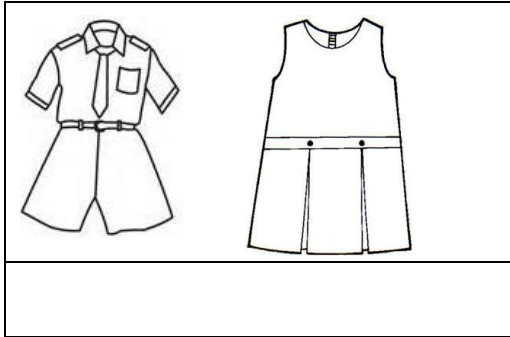
37. Name one item needed during baptism.

PAPER 8

SECTION A: (40 MARKS)

92. How do you come to school?

93. Name this school symbol.



94. Give one role of a doctor in our community.

95. Mention any one member of an extended family.

96. Name any one building found in our school.

97. Why are trees important in our school compound?

98. Name one material used for building a hut.

99. Give one way of keeping order in a class.

100. Write one thing a school gets from the neighbourhood.

101. Give one activity done by children at home.

102. Name one thing made from sisal.

103. Give any one importance of culture to people.

104. Why do people keep dogs in their homes?

105. Mention any one important place in your community.

106. Give one importance of sand.

107. Which people keep law and order in our community?

108. How is electricity useful at home?

109. Match correctly

Charcoal stove	for pounding.
Mortar and pestle	for cooking.
Mingling stick	for keeping water.
Pot	for mingling food.

Charcoal stove

Mortar and pestle

Mingling stick

Pot

110. Name any one type of season in a year.

111. Write any one unsafe way of using the road.

112. What is the quickest type of transport?

113. Give any one cloth best for wearing on a rainy weather.

114. Where do we find this animal?



115. How is a mother important in a home?

116. Name one thing we make at school?

117. Mention any one animal used for transport.

118. Draw and name any one thing found in a sitting room.

119. Give one example of a recreation centre.

120. Draw and name the gift of the body used for seeing.

121. (a) Which disciple denied Jesus?

(b) How do we use our hands to worship God?

122. In which book of the Bible do we find the story of creation?

123. Give one way of worshipping God.

124. Draw and name any two things created by God.

125. How did Jesus show concern for people?

126. Name one basic need of people.

SECTION B (60 MARKS)

127. (a) Write your cultural name.

(b) Give any two good cultural activities in our community.

(i) _____

(ii) _____

128. (a) Along which road is our school found?

(b) Name any two problems children may find at school.

(i) _____

(ii) _____

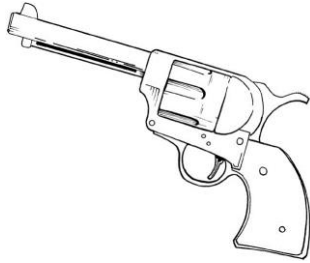
129. (a) Why do we need peace and security in our community?

(c) Name any two people who keep peace and security in our homes.

(i) _____

(ii) _____

(d) Name this object used to keep peace and security.




130. (a) Name one thing we can make from local materials.

(b) Give the importance of the things we can make from palm leaves.

(iii) _____

(iv) _____

131. (a) Draw this road traffic sign.



(b) Name any two means of water transport.

(i) _____

(ii) _____

132. (a) Give one effect of accidents to people in our community.

(b) Name any two dangerous things found on the road.

(i) _____

(ii) _____

133. (a) Write any two activities done by people in our community.

(i) _____

(ii) _____

(b) From which important place do we buy food?

134. (a) Who heads a family?

(b) Name any two rooms of a house.

(i) _____

(ii) _____

135. Give the meaning of these Christian names.

(a) Moses _____

(b) Emmanuel _____

136. (a) Give any two examples of needy people.

(i) _____

(ii) _____

(b) On which day did Jesus die on the cross?

PAPER 9


SECTION A: (40 MARKS)

1. Write any one play material at school.

2. Why do we need a clock in our classroom?

3. Write any one way you can care for the shoes.

4. Name this school symbol.



5. Why do we need guards at school?

6. What do we call the group of people related by blood or marriage?

7. How do we protect ourselves from rainfall?

8. Draw these traffic road signs.

Zebra crossing	Humps ahead

9. Name one basic need we get from a garden.

10. Name this activity done by people in the community.



11. Write one cultural practice in our community.


12. Tick two dangers of wild animals to people.

- (a) Provide us with meat
- (b) Destroy our crops
- (c) Protect us
- (d) Kill other animals and people

13. Mention any one example of crafts.

14. Give the importance of these things.





15. Complete the table correctly.

Important people	role	Place of work
_____	Treats sick people	hospital
Policemen	_____	Police station
Reverends	Preach the word of God	_____

16. Write any one way you can care for plants.

17. Draw these building materials.

nails	bricks

18. Give any two animals used for transport.

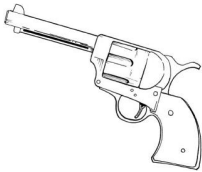
(i) _____ (ii) _____

19. Name any one item made by a carpenter.

20. How is a school important to the community?

21. Which symbol helps us to locate our school?

22. Name this tool used for keeping peace and security.



23. Write one role of children at home.

24. What do we call the brother to you mother?


25. Match correctly.



gumboots



umbrella



sunglasses



hat

26. Write one result of insecurity.

27. Fill in correctly.

Adam, rested, six, God

_____ created the earth and heaven in
_____ days. He created Eve and _____ to
take care of his creation. On the seventh day,
God _____

SECTION B (60 marks)

28. (a) Give any two groups of people who keep peace and security at school.

(i) _____

(ii) _____

(b) How can children help to keep peace and security at home?

29. Write one craft made from palm leaves.

30. (a) Give any one importance of a market in the community.

(b) State any two items we buy from the market.

(i) _____ (ii) _____

31. Study the weather below and answer the given questions.



(a) Name the type of weather above.


(b) Write two items the girl is using to protect herself from the weather.

(i) _____

(ii) _____

(c) Mention any one activity done by farmers in the dry season.

32. (a) Name these things we make from banana fibres.



(b) Why do we need balls?

33. (a) Write any two unsafe ways of using the road.

(i) _____

(ii) _____

(b) Give any one way of preventing road accidents.

34. (a) Write one animal kept at home for milk.

(b) Name any two needs of a family.

(i) _____

(ii) _____

35. Use the pictures below to answer the questions that follow.



(a) Who was baptized in the picture above?

(b) In which river was he baptized ?

(c) Give one reason why Christians are baptized.

36. (a) What is a prayer?

(b) Why do we pray to God?

37. (a) Of the two Jacob and Esau, who was dishonest?

(b) Write any one way a P.2 child can be honest to his/
her teacher.

38. Draw these Christian symbols.

cross	rosary

PAPER 10

SECTION A: (40 MARKS)

137. Why do you come to school?

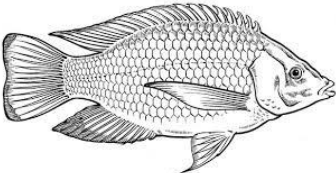
138. Name this means of railway transport.



139. Write one activity carried out in our classrooms.

140. Give one role of children at home

141. Where does this animal live?



142. Name two rooms found in a house.

(i) _____ (ii) _____

143. Draw and name any one thing found in a bathroom.

144. Circle any two important people in our community.

carpenters, women, parents, thieves

145. Draw and name the holy place where children go for prayers.

146. Mention any two animals we find in a zoo.

(i) _____ (ii) _____

147. Give one use of sunshine to people.

148. Write one activity done in a wet season?

149. Match correctly.

hoe

for peeling food.

watering can

for carrying manure.

wheelbarrow

for weeding.

knife

for watering plants.

150. What name is given to the brother of your mother?

151. Draw these things we make.

basket	pots

152. Give one use of balls to children.

153. Write one activity done by people in our community.

154. Name any one plant in our school environment.

155. Mention the animal kept at home for security.

156. Tick any two causes of insecurity at school

beating, love, stealing, good health

157. What is the importance of water to people?

158. Write any two symbol of a school.

159. Give any one cause of problems between the school and neighbourhood.

160. Mention any one cultural activity carried out in our community.

161. Write your Religious name

162. Name one God's creation which gives us meat.

163. What is prayer?

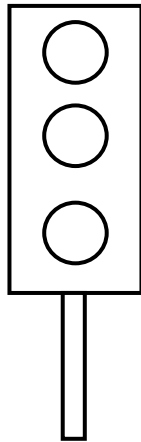
164. How did Jesus show love to people?

165. Name any two members of a nuclear family.

166. Give any one item used during baptism.

SECTION B (60 MARKS)

167.



(a) Name this road sign

(b) What do these colours on the traffic lights mean?

(i) Red means _____

(ii) Orange means _____

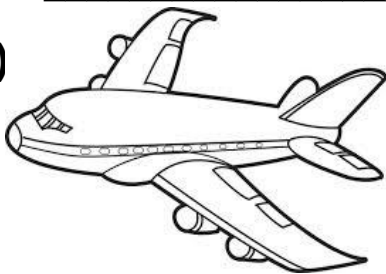
(iii) Green means _____

168. Name two important places in our community.

(i) _____ (ii) _____

169. (a) How do you come to school?

(b)



Name this type of transport.

(c) Write any two animals we use for transport.

(i) _____ (ii) _____

170.



(a) Which type of weather is shown in the picture?

(b) Write any two things we use to manage this type of weather.

(i) _____

(ii) _____

(c) Give one danger of too much rainfall.

171. Match correctly.

policemen

repair cars.

religious leaders

preach the word of god.

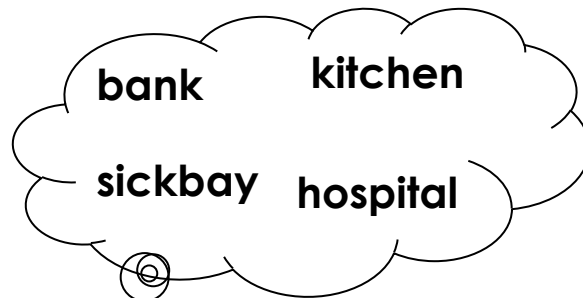
barbers

keep law and order.

mechanics

cut people's hair.

172. Underline any two buildings found in a school.



173. (a) Draw and name one thing we make from palm leaves.

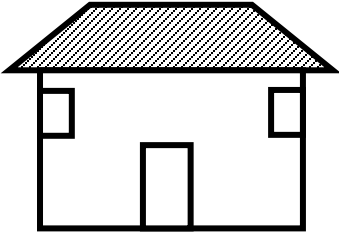


(b) Where do we get clay soil from?

174. Which one of Jesus' disciples

(a) was a tax collector? _____

(b) betrayed Jesus? _____

175. Name these basic needs of people.

176. According to the events of the last supper in Luke 22:14 – 21 what do these things mean?

(a) wine - _____

(b) bread - _____

177. On which day do Christians go to worship God?

PAPER 11

SECTION A

1. A place where animals or people live is a

2. Give one example of a family member.

3. Name any one person found in a school.

4. Who heads a school?

5. Write the name of your school.

6. Write one thing found in the classroom.

7. Give one type of transport.

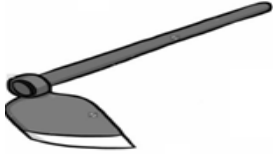
8. Write one building material you know.

9. Give one reason why pupils go to school.

10. Who treats sick people in the community?

11. Give one role of a father in a family.

12. Name the garden tool below.



13. What do we use for smelling?

14. _____ is the sudden injury to the body.

15. Give **one** way of caring for plants.

16. Give **one** example of a living thing.

17. Which animal gives pork?

18. Name this tool below.



19. Give **one** thing we get from birds.

20. Underline the vehicle which takes sick people to hospital.

Van

Ambulance

21. What is the main source of light?

SECTION B

22. Give any **two** school symbols.

i) _____ ii) _____

23. Match people to their places of work.

teacher

bank

pilot

salon

banker

library

hair dresser

airport

librarian

school

teacher

pilot

banker

hair dresser

librarian

24. Name **one** thing we make from banana fibres.

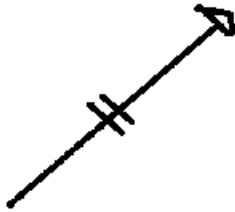
25. Name **one** thing we use to clean the school.

26. Mention **one** source of water.

27. Draw these elements of weather.

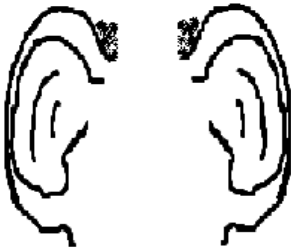
rainfall	Sunshine

28. Name these things used to keep peace and security.





29. Name this sense organ.



30. Give **two** uses of water.

i) _____

ii) _____

31. Name this type of weather.



32. Name any **two** domestic animals.

i) _____ ii) _____

33. Name **two** things we use when brushing our teeth.

i) _____ ii) _____

34. What do we do after visiting the latrine/toilets?

35. Name these foods.

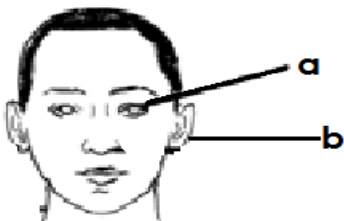




36. Name **two** insects.

i) _____ ii) _____

37. Name the parts of the body below.



a _____

b _____

38. Name these dangerous objects.



PAPER 12

39. Write **one** object found in the class room.

40. Write Tr. In full.

41. Why do we need cooks at school?

42. Draw these things made out of local materials.

balls	rope

43. Mention any **one** need of a school.

44. How useful is a dog at home?

45. Give any **one** school symbol.

46. Name any **one** person who treats sick people.

47. Write the roles of these people in a home.

Father

Mother

48. Give the use of water to man.

49. Write **one** basic need of a family.

50. Give **two** activities done to keep our school clean.

(i) _____

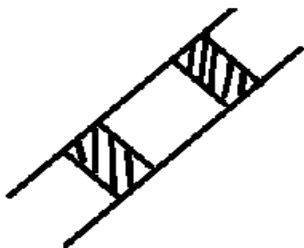
(ii) _____

51. Mention **two** groups of people found in a school.

(i) _____ (ii) _____

52. How can we keep peace and security at home?

53. Name this road symbol.



54. Give **one** example of a temporary house.

55. Mention **two** types of weather.

(i) _____ (ii) _____

56. Write **one** thing found on the school badge.

57. Mention **two** members of an extended family.

(i) _____ (ii) _____

58. Name any **one** source of water.

59. Of what importance is a broom in a classroom?

60. Match the people to their means of transport.

Bus

Sailor

Aeroplane

Driver

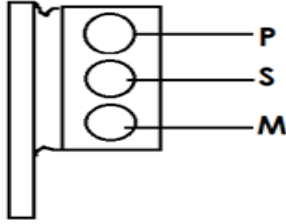
Boat

Pilot

61. Draw these means of road transport.

lorry	car	bus

62. Name these colours on the traffic lights.



P _____

S _____

M _____

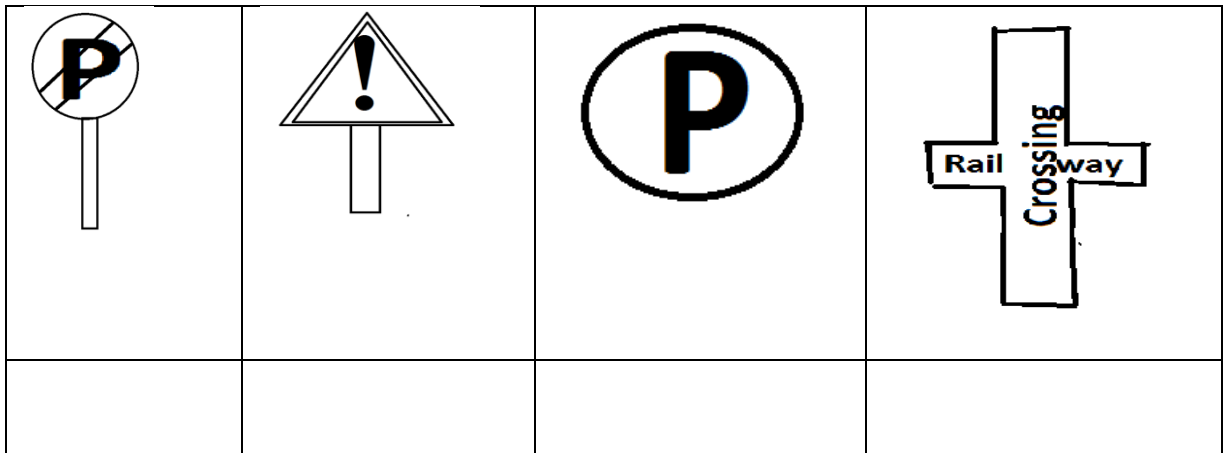
63. Mention **two** things made from clay.

(i) _____ (ii) _____

64. Write **two** things used in the kitchen.

(i) _____ (ii) _____

65. Name the following road signs.



PAPER 13

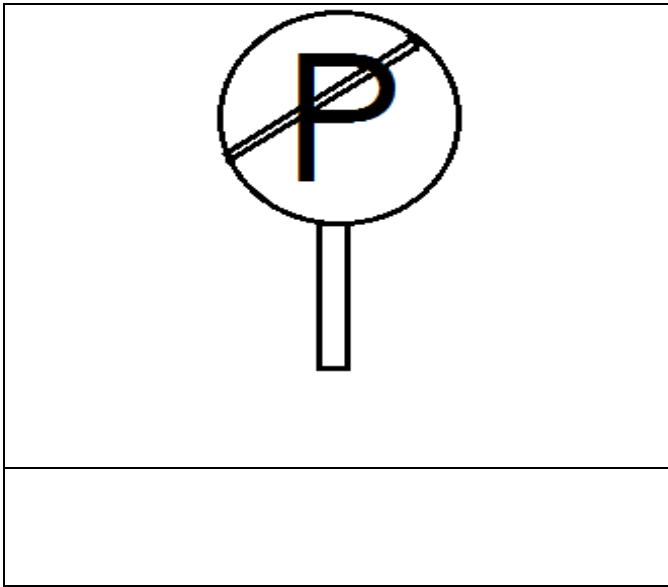
66. What title is given to the head of a school?

67. Which animal guards our home?

b) Name one item used for writing.

68. How is a clock useful in a classroom?

69. Name this traffic road sign.



70. Write down **one** thing school children do every day.

71. Why did God create the sun?

72. Write any **two** colours of your school uniform.

_____ (ii) _____

73. Why do we need chairs at home?

74. Mention any **one** duty of a father at home.

75. Which domestic animal is kept for chasing away eating rats?

76. Name these activities done by children at school.



77. Why do we need class rules?

78. Name **two** things teachers use to teach children.

(ii) _____ (ii) _____

79. Name any **two** things made by a carpenter.

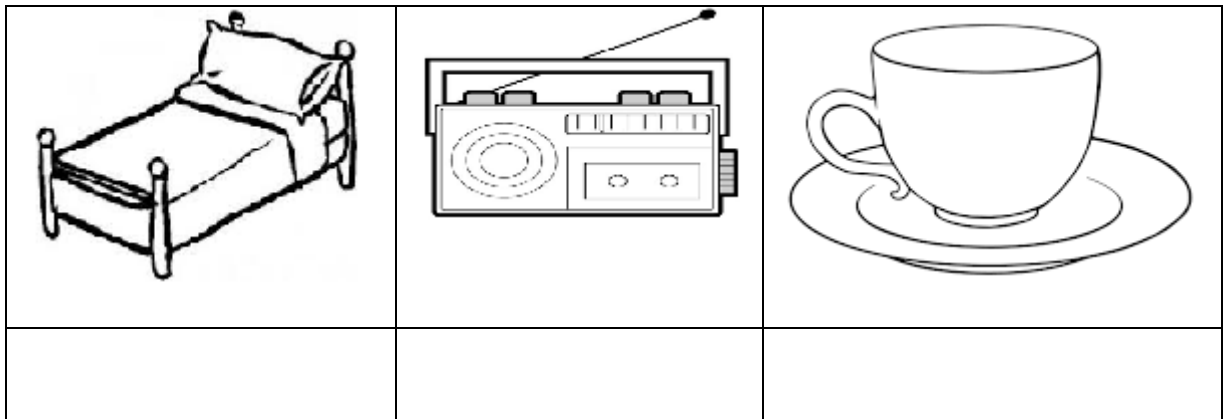
(i) _____ (ii) _____

80. Name **one** important place where people go for shopping.

81. Write **one** means of road transport.

82. How do we keep our classroom clean?

83. Name these things found in a house.



84. Mention **two** members of an extended family.

(ii) _____

(iii) _____

85. Match correctly.

cleaner

cooks food.

teacher

cleans the school.

cook

teaches children.

86. Draw these things we use to play with.

ball	skipping rope	doll

87. Name the material used to make pots.

b) Give **one** use of a pot at home.

88. Name these things used to keep peace and security.

89. Name any **two** important places found in our community.

(ii) _____ (ii) _____



90. Give any **one** use of water at school.

91. Name any **two** uses of a cow as God's creation.

i) _____

ii) _____

92. Name these items used to manage weather.

93. Circle **two** animals used for transport.

horse

sheep

camel

goat

94. Give **two** uses of water.

i) _____

ii) _____

95. Mention any **two** symbols of a school.

i) _____

ii) _____

96. What is a nuclear family?

b) Name any **two** members of a nuclear family.

i) _____

ii) _____

97. Draw and name any **two** means of road transport.



98. In which season do farmers plant crops?

99. Mention the main activities done by these people;

a) fishermen : _____

b) farmers : _____

100. Name these traffic road signs.






PAPER 14

101. In which district is your school found?

102. In which division is your school?

103. Write the name of your head teacher.

104. **Name these people found at school.**

105. Identify any **two** school symbols.

- (i) _____
- (ii) _____

106. Why should we put on a uniform?

107. Which school symbol tells us the name of the school?

108. A man who heads a school is called _____

109. Draw these things used in a class.

Piece of chalk	Blackboard	Pencils	Books

110. List **two** things you play with at school.

- (i) _____
- (ii) _____

111. Mention **two** examples of things a school can buy from neighbours.

- (i) _____
- (ii) _____

112. Give **two** examples of permanent houses.

- (i) _____
- (ii) _____

113. Who keeps law and order in a country?

114. Draw the following we use in a rainy day.

raincoat	umbrella	sweater	jacket

115. Mention **two** things which make your school different from others.





- (i) _____
(ii) _____

116. Write S.S.T in full.

117. Give **two** types of weather.

- (i) _____
(ii) _____

118. Draw and name **two** examples of permanent houses.

119. Mention **two** animals which give us meat.

- (i) _____
(ii) _____

120. Mention any **two** things you can use to keep the school compound clean.

- (i) _____
(ii) _____

121. Give **two** uses of sand.

- (i) _____
(ii) _____

122. Write any **two** colours of your school uniform.

- (i) _____
(ii) _____

123. Draw the things used to clean the compound.

slasher	broom	rake	scrubbing brush

124. Mention **three** things found in your classroom.

(i)

(ii)

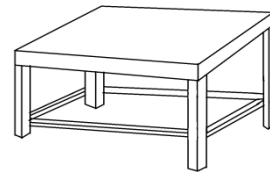
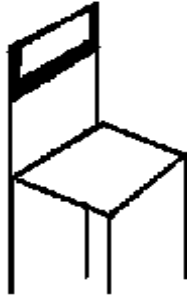
(iii)

PAPER 15

125. _____ is the movement of people and their goods from one place to another,

126. Write any two means of road transport.

127. **Name these things we make from wood.**



128. Write any **two** dangerous things found on road.

(i) _____

(ii) _____

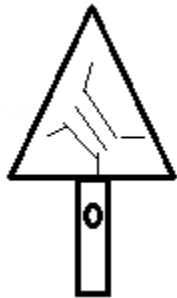
129. Who flies an aeroplane?

130. Who heads a country?

131. **Draw the things we make from clay.**

pot	cups	bricks	plates

132. Name these road signs.



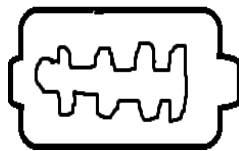




133. _____ is the first help given to an injured person before being taken to hospital. **(First Aider, First Aid)**

134. Name these things we use to give First Aid.









135. **Match animals and their homes.**

goat

sty

rabbit

water

lion

den

fish

hutch

pig

shed

136. Give any **two** important places in our community.

(i) _____

(ii) _____

137. Give **two** elements of weather.

(i) _____

(ii) _____

138. Give **two** main uses of clay to man.

(i) _____

(ii) _____

139. Draw these things in our surroundings

hills	trees	birds	animals

140. Who heads a school?

141. Mention **two** useful insects.

(i) _____

(ii) _____

142. Draw these buildings

hut	bungalow

143. Write **two** things we get from birds.

(i) _____

(ii) _____

144. Who keeps law and order?

145. Give **two** learning areas you like best.

(i) _____

(ii) _____

146. List **two** dangerous animals.

(i) _____

(ii) _____

147. Which soil is best for building?

PAPER 16

148. Which animal provides security at home?

149. Write any one item used to clean the compound.

150. In which season do farmers water their crops?

151. Name any one type of weather.

152. Mention any one activity done by children at home.

153. Write any one subject taught at school.


154. Circle the useful insects.

wasps, housefly, cockroaches,
 grasshoppers

155. Give one use of a dustbin at school compound.

156. Mention any one building material used to build a bungalow.

157. Draw this member of the family.

grandmother


158. Mention any one person found at school.

159. Write SST in full.

160. Of what use is a panga to a farmer?

161. Name any one animal that lives in water.

162. Where do we get treatment when we are sick?

163. Write Tr. in full.

164. Name the body part used for smelling.

165. Name any one type of a house found in a community

166. Name any one thing used for communication.

167. Give any one thing we buy from the market.

168. Write down your school motto.

169. Which school symbol directs people to your school?

170. Write any one thing we make from animal skin.

171. How useful is the material below?



172. Mention any one important place in our community.

173. Give any one means of road transport.

174. Which type of clouds give us rain?

175. Mention any one group of people who put on a uniform.

176. Draw any one garden tool in the space below.



177. Why do we need these buildings?

(i) toilets

(ii) clinics

178. What do we call a group of people living and working together?

179. Give one example of a fruit tree.

180. Mention two activities done by children at home.

(i)

(ii)

181. Match the following animals to their sounds.

man

trumpets

lion

speaks out

elephant

roars

cock

crows

SECTION B

182. Mention any two uses of trees to people.

(i)

(ii)

183. Match correctly.

Teacher

church

Farmer

workshop

Carpenter

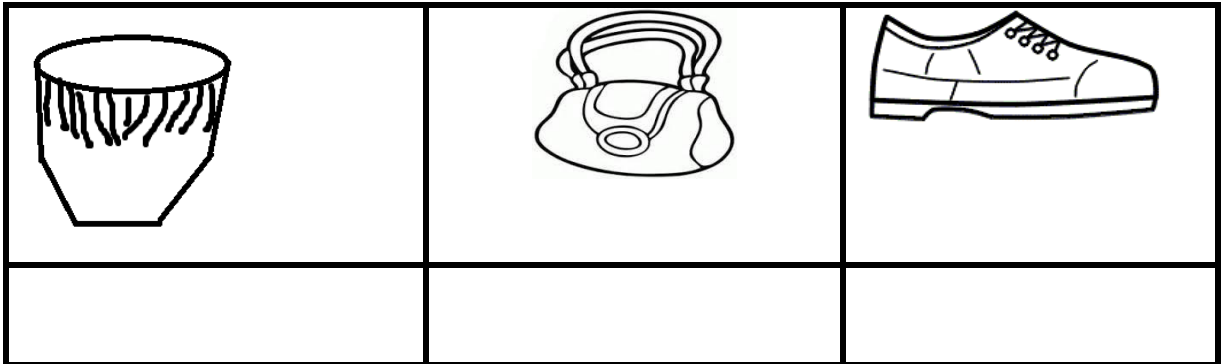
school

Priest

garden

184. Which colour of the traffic tells the driver to stop?

185. Name these things we make from animal skins.



186. Mention two examples of furniture.

(i) _____

(ii) _____

187. Name the bird found in the middle of the Uganda flag.

188. How useful are the following at home?



(i) mortar and pestle;

(ii) _____
broom

189. Give two types of transport

(i) _____ (ii) _____

190. Draw these means of transport.

train	aeroplane
	

191. Give two ways of caring for animals.

(i) _____

(ii) _____

192. Which basic need is provided by a dog?

193. Write one problem faced by people in your community.

194. Mention two products got from milk.

(i) _____ (ii) _____

(shoes, butter, ice cream, belts)

195. Give the animal young ones.

dog : _____

cat : _____

pig : _____

man : _____

196. Where do people cross busy roads from?

PAPER 17

Name any two animals kept at home.

i) _____

ii) _____

2. What is a school?

3. Apart from balls, give any other two things we make for playing.

i) _____

ii) _____

4. Name any two people found in a nuclear family.

i) _____

ii) _____

5. Who makes furniture?

6. Give any two people found in a community.

i) _____

ii) _____

7. Name any two school symbols.

i) _____

ii) _____

8. A _____ is a group of people living together related by blood or marriage and adoption.

9. Why do people make mats in the community?


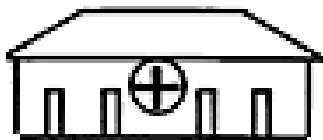
10. How do we call the acceptable way of behaving in the community?

11. Write down any two types of transport
i) _____ ii) _____
12. Why do we need camels in the community?

13. Give the places of work for the following people below.
a) Carpenter - _____
b) Pilot _____
c) Teacher - _____
14. Name any two building materials made out of clay.
i) _____ ii) _____
15. What is the common type of transport?

16. Apart from the garden, write other two sources of food people.
i) _____ ii) _____
17. Name any two things we make from wood.
i) _____ ii) _____
18. What is the source for wood?

19. Name these important places in the community.



20. Name any two things found in the bedroom.

i) _____ ii) _____

21. Write any two benefits of a school from the neighbours.

i) _____

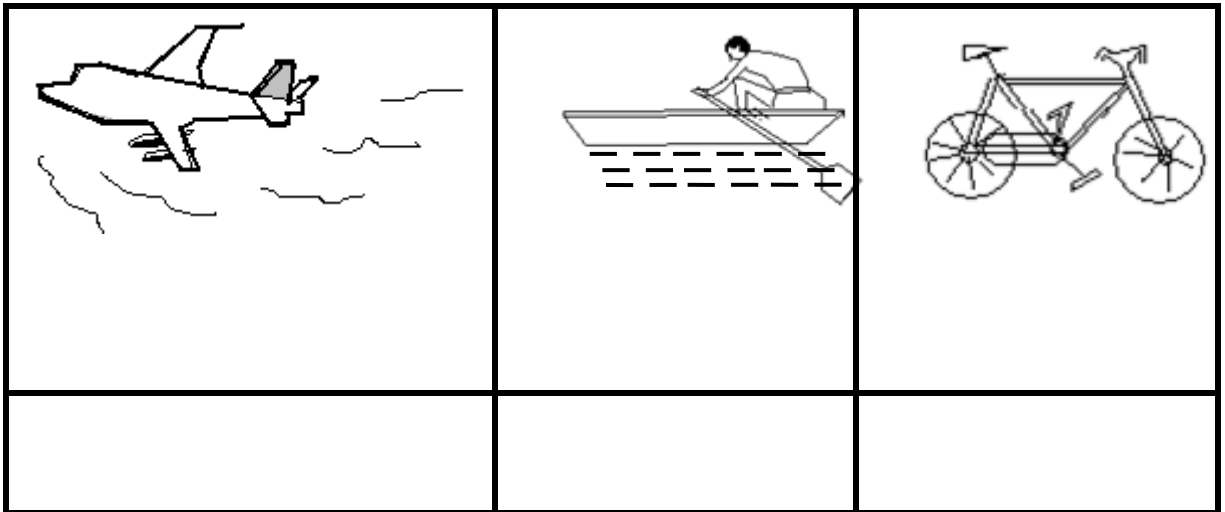
ii) _____

22. What is the quickest means of transport?

23. What material is used to make mats?

24. Name one dangerous animal in the environment.

25. Name these means of transport.



26. Write any two buildings found at school.

i) _____ ii) _____

27. Give the roles of these people at school.

a) Headteacher - _____

b) Cook - _____

28. Name these traffic road signs.

